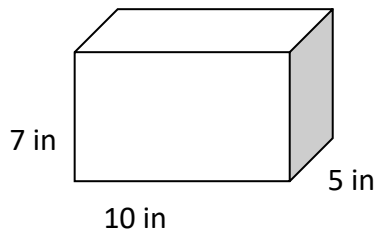


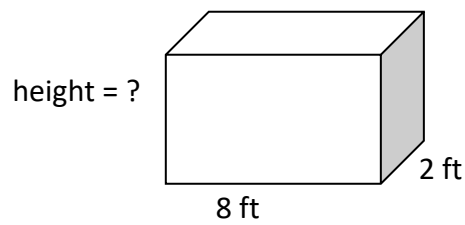
Volume of Rectangular Prisms – Complete these problems and #12-14 on pg 146 of the packet

1.



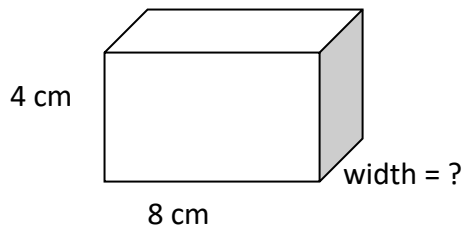
Volume = _____

2.



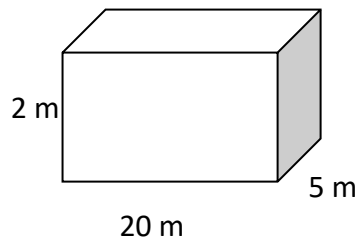
Volume = 84 ft^2 height = _____

3.



Volume = 128 cm^2 width = _____

5.



Volume = _____