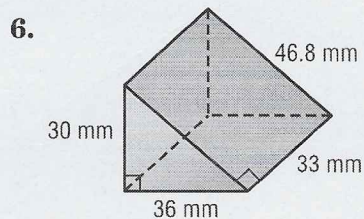
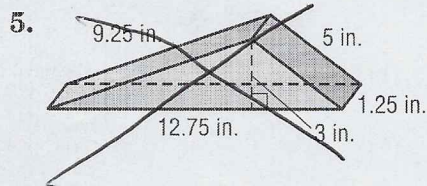
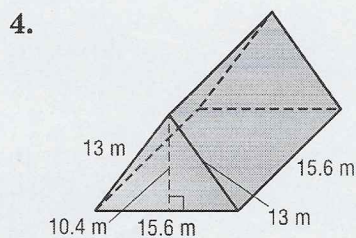
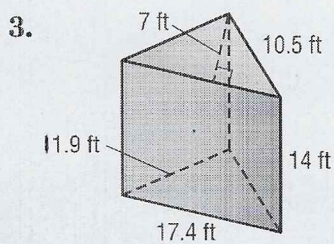
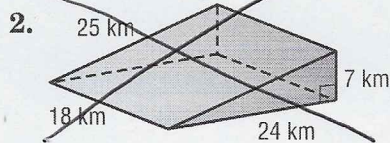
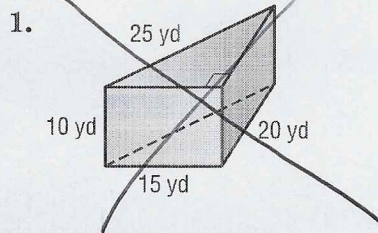


# Lesson 4 Skills Practice

## Surface Area of Triangular Prisms

Find the surface area of each triangular prism. Round to the nearest tenth if necessary.



7. A box of snack crackers is in the shape of a triangular prism. What is the surface area of the box?

