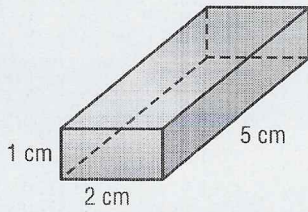


Lesson 3 Skills Practice

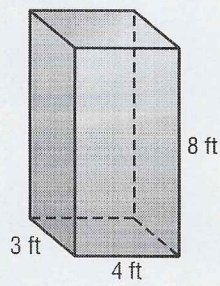
Surface Area of Rectangular Prisms

Find the surface area of each rectangular prism.

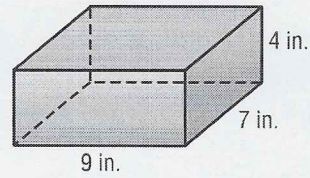
1.



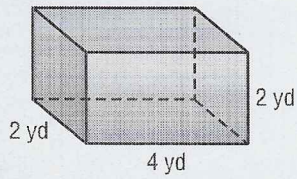
2.



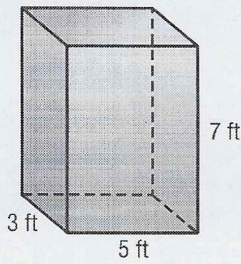
3.



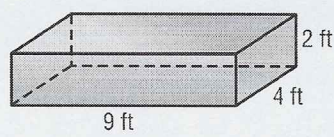
4.



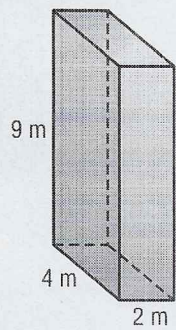
5.



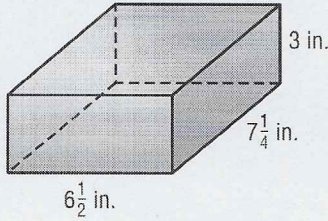
6.



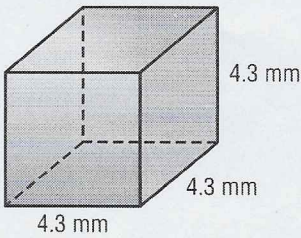
7.



8.



9.



10. Find the surface area of a rectangular prism that is 3 feet by 4 feet by 6 feet.

11. What is the surface area of a rectangular prism that measures 12 meters by 11 meters by 9 meters?