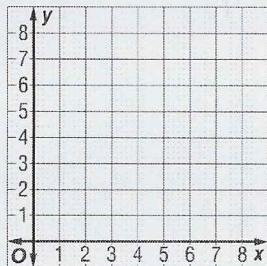


Lesson 5 Skills Practice

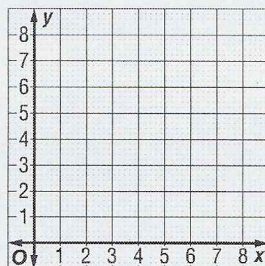
Polygons on the Coordinate Plane

Use the coordinates to find the length of each side of the rectangle.
Then find the perimeter.

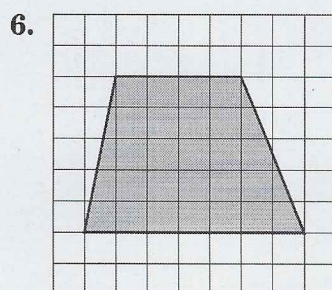
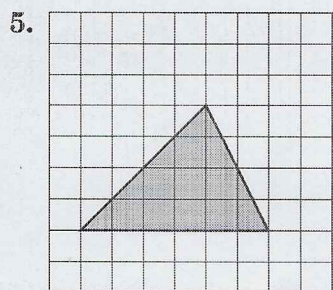

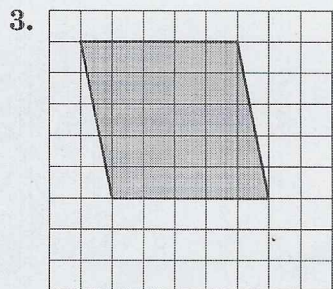
1. $E(1,7)$, $F(3,7)$, $G(3,4)$, $H(1,4)$



2. $W(2,7)$, $X(2,0)$, $Y(6,0)$, $Z(6,7)$



Find the area of each figure in square units.



Copyright © The McGraw-Hill Companies, Inc. Permission is granted to reproduce for classroom use.