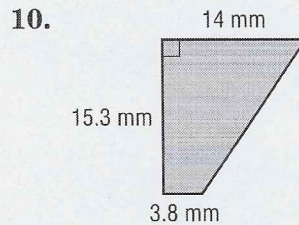
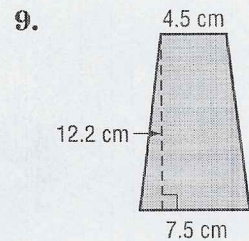
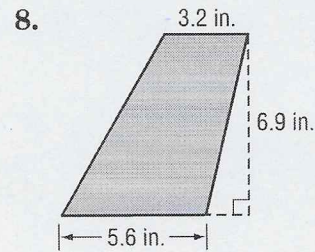
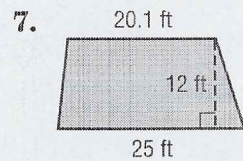
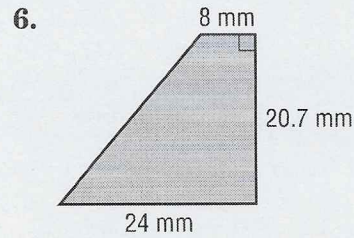
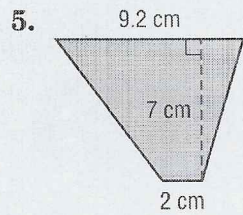
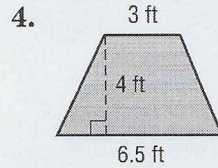
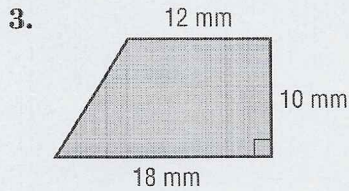
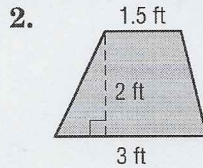
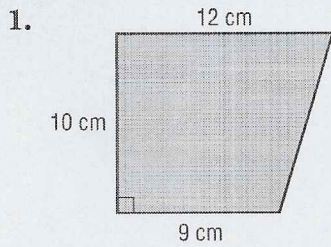


Lesson 3 Skills Practice

Area of Trapezoids

Find the area of each figure. Round to the nearest tenth if necessary.



11. trapezoid: bases 22.8 mm and 19.7 mm, height 36 mm
12. trapezoid: bases 5 ft and 3.5 ft, height 7 ft
13. DESKS What is the area of the top of the desk shown at right?

