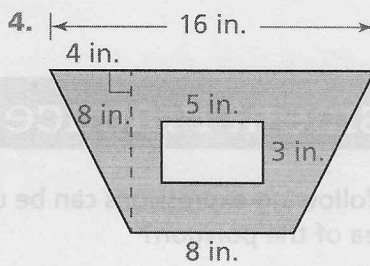
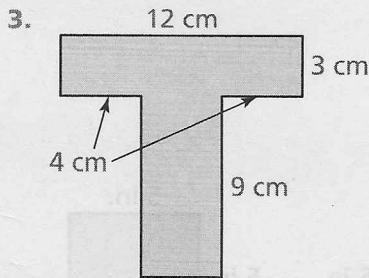
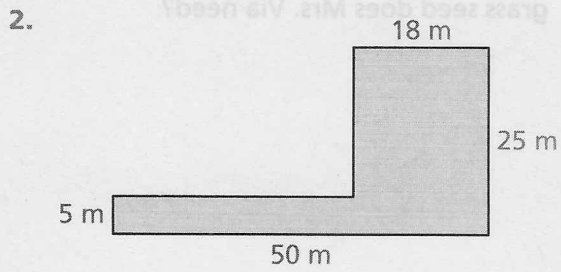
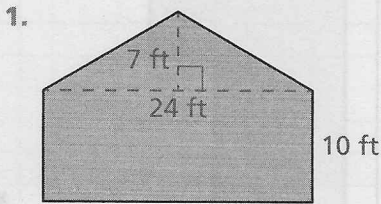
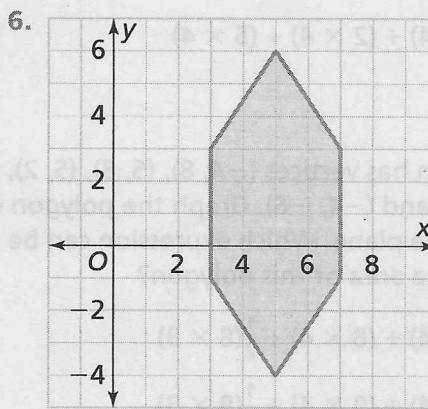
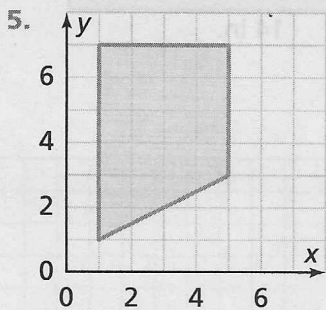


# 7-4 Additional Practice

In 1–4, find the area of each polygon or shaded region.



In 5 and 6, find the area of each polygon in square units.



7. The city engineer plans to insert a storm water drain within a public garden space. The green garden space will be filled with rocks and plants that help to purify the water. What is the area of the space that will be filled with plants and rocks?

